

Name: _____

Math is Gold

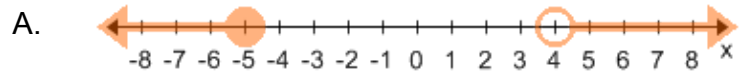
Date: _____

Topic: Compound Inequalities

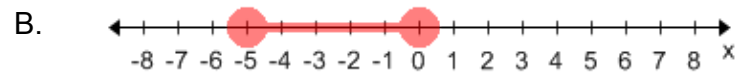
(id:comp_ineq_match_A.1)

Title: Match the compound inequalities. Fill in the blank with correct letter.

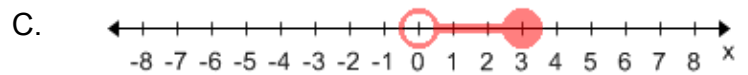
1) _____ $2 < x \text{ and } x < 7$



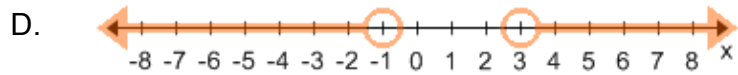
2) _____ $0 < x \text{ and } x \leq 3$



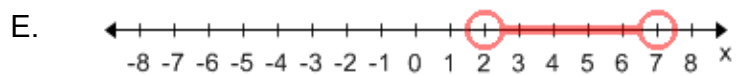
3) _____ $-5 \leq x \text{ and } x \leq 0$



4) _____ $-1 \leq x \leq 2$



5) _____ $-2 < x \leq 4$



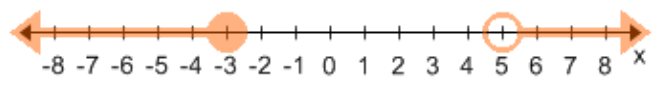
6) _____ $x < -2$ or $x > 2$

F.



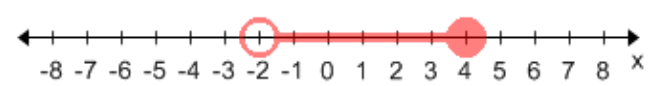
7) _____ $x < -1$ or $x > 3$

G.



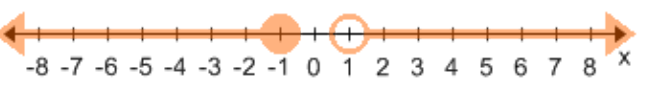
8) _____ $x \leq -5$ or $x > 4$

H.



9) _____ $x \leq -1$ or $x > 1$

I.



10) _____ $x \leq -3$ or $x > 5$

J.

