

Name: _____

Math is Gold

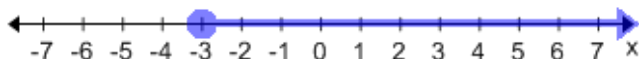
Date: _____

Topic: One Variable Inequalities

(id:one_var_ineq_write_M.1)

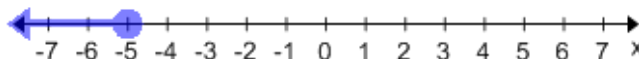
Title: Write the inequality for each graph

1)



Ans: _____

2)



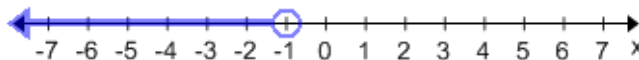
Ans: _____

3)



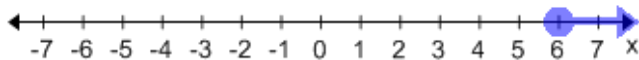
Ans: _____

4)



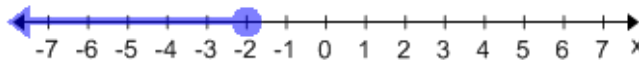
Ans: _____

5)



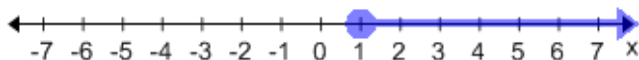
Ans: _____

6)



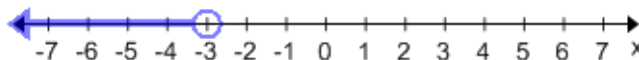
Ans: _____

7)



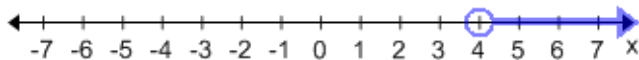
Ans: _____

8)



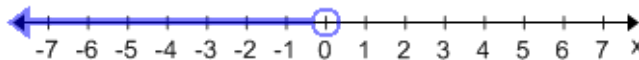
Ans: _____

9)



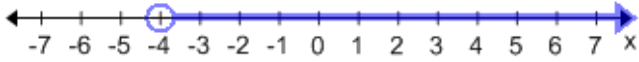
Ans: _____

10)



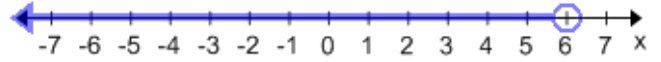
Ans: _____

11)



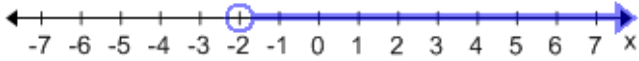
Ans: _____

12)



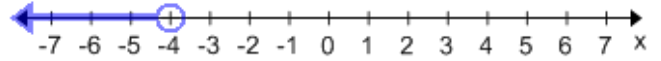
Ans: _____

13)



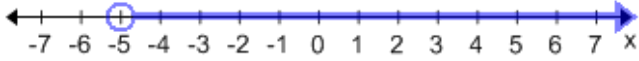
Ans: _____

14)



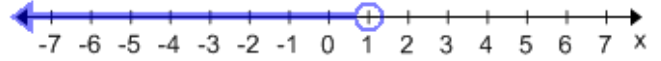
Ans: _____

15)



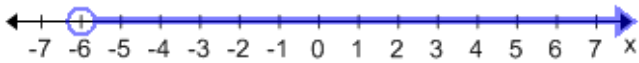
Ans: _____

16)



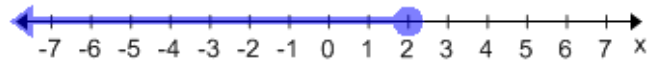
Ans: _____

17)



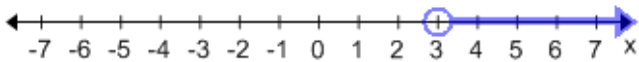
Ans: _____

18)



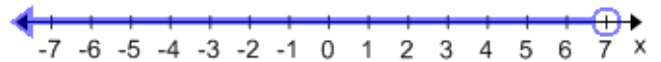
Ans: _____

19)



Ans: _____

20)



Ans: _____